


Des rectangles à l'aide – Corrigé

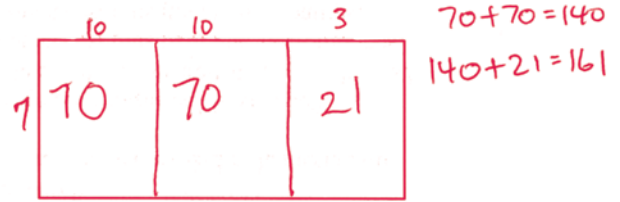
Détermine les produits ci-dessous à l'aide des rectangles.
Laisse des traces de tes calculs.
Voici des exemples de solutions possibles :

7×13



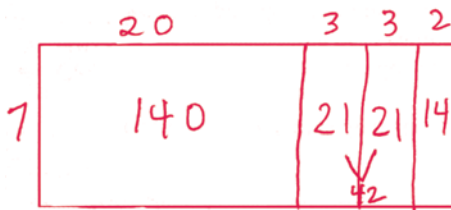
$7 \times 13 = 91$

7×23



$7 \times 23 = 161$

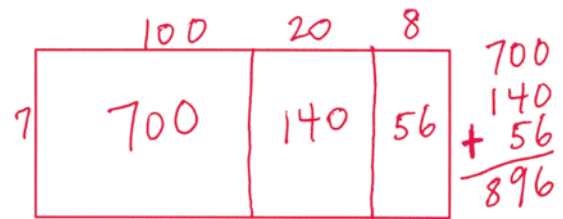
7×28



$140 + 42 + 14 = 196$

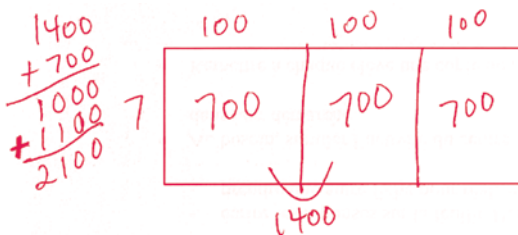
$7 \times 28 = 196$

7×128



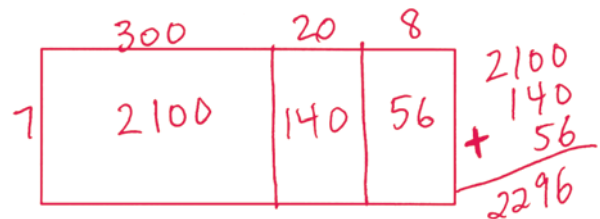
$7 \times 128 = 896$

7×300



$7 \times 300 = 2\ 100$

7×328



$7 \times 328 = 2\ 296$